

Nome: _____ nº: _____ T. _____ Data: _____

6.1.10b Comparação, Ordem Crescente e Decrescente, Reta Numerada

1. Efetue os cálculos e complete com os símbolos de $>$, $<$ ou $=$.

a) $22 : 2$ ___ 4×3 e) $8 + 23$ ___ $59 - 23$ i) 5×23 ___ $339 : 3$

b) 5×5 ___ $48 : 2$ f) 3×2 ___ $12 : 2$ j) $15 : 3$ ___ $60 : 6$

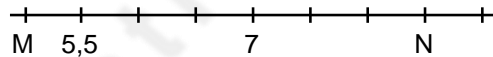
c) 12×11 ___ 13×10 g) 230×10 ___ 100×23 k) $28 - 13$ ___ $65 - 54$

d) $99 : 3$ ___ $132 : 4$ h) $15 : 5$ ___ $12 : 4$ l) 8×5 ___ $3 + 38$

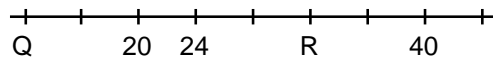
2. Coloque a tabela abaixo em

ordem:	Crescente
203	
909	
902	
293	
393	
903	
209	
392	

4. Qual o valor de M e N?



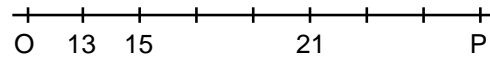
6. Qual o valor de Q e R?



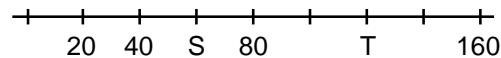
3. Coloque a tabela abaixo em

ordem:	Decrescente
456	
654	
604	
546	
406	
565	
605	
465	

5. Qual o valor de O e P?



7. Qual o valor de S e T?



Nome: _____ nº: _____ T. _____ Data: _____

6.1.10b Comparação, Ordem Crescente e Decrescente, Reta Numerada

1. Efetue os cálculos e complete com os símbolos de $>$, $<$ ou $=$.

a) $22 : 2$ ___ 4×3 e) $8 + 23$ ___ $59 - 23$ i) 5×23 ___ $339 : 3$

b) 5×5 ___ $48 : 2$ f) 3×2 ___ $12 : 2$ j) $15 : 3$ ___ $60 : 6$

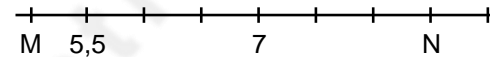
c) 12×11 ___ 13×10 g) 230×10 ___ 100×23 k) $28 - 13$ ___ $65 - 54$

d) $99 : 3$ ___ $132 : 4$ h) $15 : 5$ ___ $12 : 4$ l) 8×5 ___ $3 + 38$

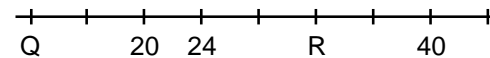
2. Coloque a tabela abaixo em

ordem:	Crescente
203	
909	
902	
293	
393	
903	
209	
392	

4. Qual o valor de M e N?



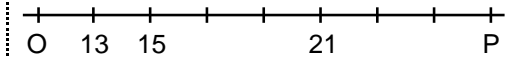
6. Qual o valor de Q e R?



3. Coloque a tabela abaixo em

ordem:	Decrescente
456	
654	
604	
546	
406	
565	
605	
465	

5. Qual o valor de O e P?



7. Qual o valor de S e T?

