

Nome: _____ nº: _____ T. _____ Data: _____

6.2.4a Comparação Naturais e Decimais

1. Efetue os cálculos e complete com os símbolos de >, < ou =.

a) $5 + 3$ ___ $3 + 4$ e) $5,3 + 2$ ___ $7,2 + 1,62$ i) $0,5 + 2$ ___ $5 - 2,4$

b) $20 - 9$ ___ $37 - 18$ f) $8,3 - 2,4$ ___ $0,72 + 6,2$ j) $15 - 1,8$ ___ $3 \times 4,1$

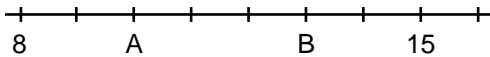
c) 8×7 ___ 9×6 g) $1,2 \times 3$ ___ $1,2 \times 0,3$ k) $12 : 4$ ___ $1,2 : ,4$

d) $100 : 4$ ___ $90 : 6$ h) $1,2 : 2$ ___ $1,2 : 0,2$ l) $6,3 \times ,5$ ___ $6,3 : 2$

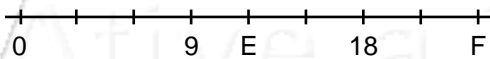
2. Coloque a tabela abaixo em

ordem:	Crescente
3,1	
2,5	
4,53	
3,02	
3,61	
0,543	
3,061	
0,541	

4. Qual o valor de A e B?



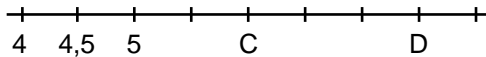
6. Qual o valor de E e F?



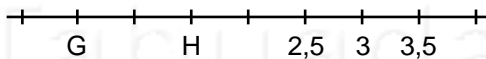
3. Coloque a tabela abaixo em

ordem:	Decrescente
25,08	
25,12	
32,09	
3,542	
12,345	
1,23	
123,45	
1,203	

5. Qual o valor de C e D?



7. Qual o valor de G e H?



Nome: _____ nº: _____ T. _____ Data: _____

6.2.4a Comparação Naturais e Decimais

1. Efetue os cálculos e complete com os símbolos de >, < ou =.

a) $5 + 3$ ___ $3 + 4$ e) $5,3 + 2$ ___ $7,2 + 1,62$ i) $0,5 + 2$ ___ $5 - 2,4$

b) $20 - 9$ ___ $37 - 18$ f) $8,3 - 2,4$ ___ $0,72 + 6,2$ j) $15 - 1,8$ ___ $3 \times 4,1$

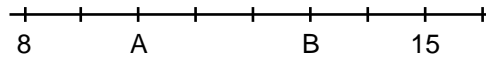
c) 8×7 ___ 9×6 g) $1,2 \times 3$ ___ $1,2 \times 0,3$ k) $12 : 4$ ___ $1,2 : ,4$

d) $100 : 4$ ___ $90 : 6$ h) $1,2 : 2$ ___ $1,2 : 0,2$ l) $6,3 \times ,5$ ___ $6,3 : 2$

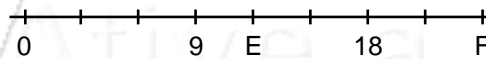
2. Coloque a tabela abaixo em

ordem:	Crescente
3,1	
2,5	
4,53	
3,02	
3,61	
0,543	
3,061	
0,541	

4. Qual o valor de A e B?



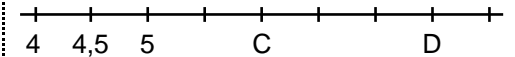
6. Qual o valor de E e F?



3. Coloque a tabela abaixo em

ordem:	Decrescente
25,08	
25,12	
32,09	
3,542	
12,345	
1,23	
123,45	
1,203	

5. Qual o valor de C e D?



7. Qual o valor de G e H?

