

Nome: _____ nº: _____ T. _____ Data: _____

6.2.4b Comparação Naturais e Decimais

1. Efetue os cálculos e complete com os símbolos de >, < ou =.

a) $22 : 2$ ___ 4×3 e) $8 + 2,3$ ___ $9 - 2,3$ i) $0,5 \times 23$ ___ $24 : 3$

b) 5×5 ___ $48 : 2$ f) $5,1 \times 2$ ___ $6 : ,2$ j) $15 : 3$ ___ $1,5 : ,3$

c) 12×11 ___ 13×10 g) $0,23 \times 10$ ___ $100 \times ,023$ k) $28 - 13$ ___ $6,5 + 8,7$

d) $99 : 3$ ___ $132 : 4$ h) $15 : 3$ ___ $1,2 : ,3$ l) $8 \times ,01$ ___ $0,03 + ,04$

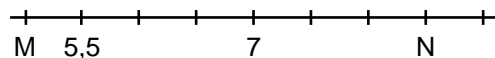
2. Coloque a tabela abaixo em

ordem:	Crescente
2,03	
3,2	
2,4	
2,07	
3,03	
2,039	
3,025	
3,002	

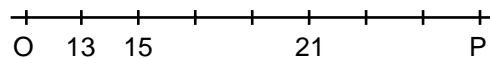
3. Coloque a tabela abaixo em

ordem:	Decrescente
5,001	
5,252	
5,205	
5,03	
4,05	
4,503	
5,025	
4,62	

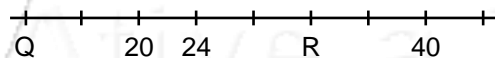
4. Qual o valor de M e N?



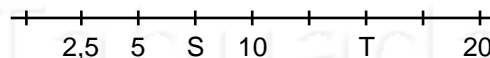
5. Qual o valor de O e P?



6. Qual o valor de Q e R?



7. Qual o valor de S e T?



Nome: _____ nº: _____ T. _____ Data: _____

6.2.4b Comparação Naturais e Decimais

1. Efetue os cálculos e complete com os símbolos de >, < ou =.

a) $22 : 2$ ___ 4×3 e) $8 + 2,3$ ___ $9 - 2,3$ i) $0,5 \times 23$ ___ $24 : 3$

b) 5×5 ___ $48 : 2$ f) $5,1 \times 2$ ___ $6 : ,2$ j) $15 : 3$ ___ $1,5 : ,3$

c) 12×11 ___ 13×10 g) $0,23 \times 10$ ___ $100 \times ,023$ k) $28 - 13$ ___ $6,5 + 8,7$

d) $99 : 3$ ___ $132 : 4$ h) $15 : 3$ ___ $1,2 : ,3$ l) $8 \times ,01$ ___ $0,03 + ,04$

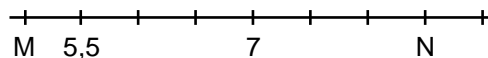
2. Coloque a tabela abaixo em

ordem:	Crescente
2,03	
3,2	
2,4	
2,07	
3,03	
2,039	
3,025	
3,002	

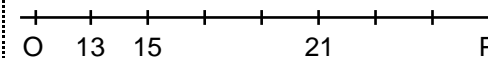
3. Coloque a tabela abaixo em

ordem:	Decrescente
5,001	
5,252	
5,205	
5,03	
4,05	
4,503	
5,025	
4,62	

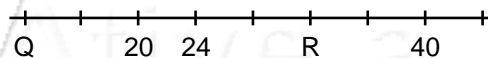
4. Qual o valor de M e N?



5. Qual o valor de O e P?



6. Qual o valor de Q e R?



7. Qual o valor de S e T?

