

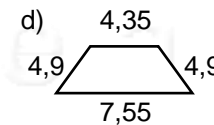
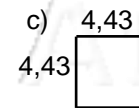
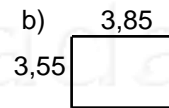
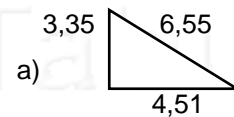
Nome: _____ nº: _____ T. _____ Data: _____

6.2.19b Racionais - Adição e Subtração

1. Complete a tabela:

+	0,17	0,23	2	2,34	2,86
0,3					
0,43					
0,56					
3,16					
3,14					

2. Calcule o perímetro:



P = _____ P = _____ P = _____ P = _____

3. Na tabela abaixo, subtraia o maior número do menor, e complete-a:

-	0,18	0,65	1,02	1,05	2,65
0,15					
0,27					
0,55					
2,43					
3,02					

4. Observe as figura abaixo, com suas medidas, e calcule os valores pedidos.

