

Nome: \_\_\_\_\_ nº: \_\_\_\_\_ T. \_\_\_\_\_ Data: \_\_\_\_\_

6.2.4a Comparação Naturais e Decimais

1. Efetue os cálculos e complete com os símbolos de  $>$ ,  $<$  ou  $=$ .

a)  $5 + 3$  \_\_\_  $3 + 4$

e)  $5,3 + 2$  \_\_\_  $7,2 + 1,62$

i)  $0,5 + 2$  \_\_\_  $5 - 2,4$

b)  $20 - 9$  \_\_\_  $37 - 18$

f)  $8,3 - 2,4$  \_\_\_  $0,72 + 6,2$

j)  $15 - 1,8$  \_\_\_  $3 \times 4,1$

c)  $8 \times 7$  \_\_\_  $9 \times 6$

g)  $1,2 \times 3$  \_\_\_  $1,2 \times 0,3$

k)  $12 : 4$  \_\_\_  $1,2 : ,4$

d)  $100 : 4$  \_\_\_  $90 : 6$

h)  $1,2 : 2$  \_\_\_  $1,2 : 0,2$

l)  $6,3 \times ,5$  \_\_\_  $6,3 : 2$

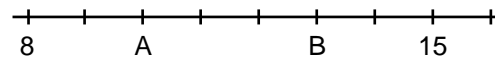
2. Coloque a tabela abaixo em

ordem:	Crescente
3,1	
2,5	
4,53	
3,02	
3,61	
0,543	
3,061	
0,541	

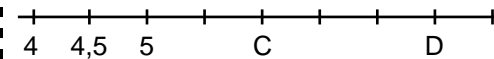
3. Coloque a tabela abaixo em

ordem:	Decrescente
25,08	
25,12	
32,09	
3,542	
12,345	
1,23	
123,45	
1,203	

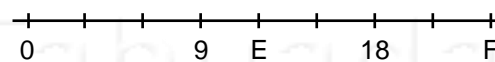
4. Qual o valor de A e B?



5. Qual o valor de C e D?



6. Qual o valor de E e F?



7. Qual o valor de G e H?

