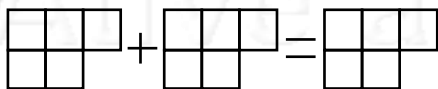


Nome: _____ nº: _____ T. _____ Data: _____

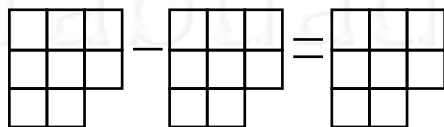
6.3.4b Adição e Subtração de Partes do Todo

1. Pinte as frações abaixo conforme o comando e calcule:

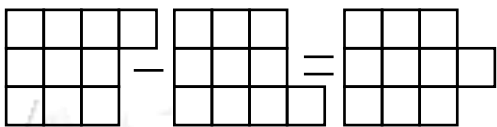
a) Dois quintos mais um quinto.



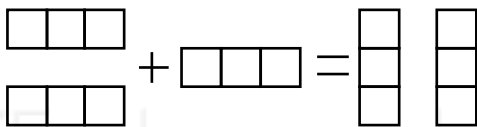
b) Seis oitavos menos dois oitavos.



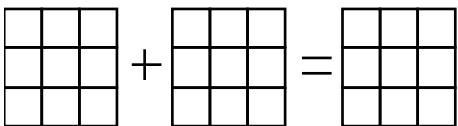
c) Nove décimos menos sete décimos.



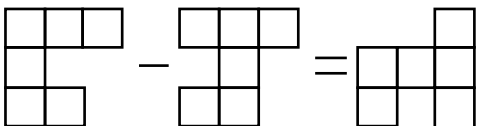
d) Quatro terços mais um terço.



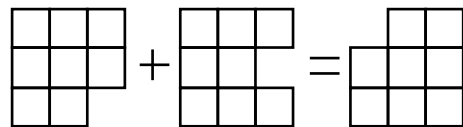
e) Cinco nonos mais quatro nonos.



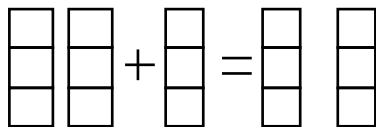
f) Seis sextos menos cinco sextos.



g) Três oitavos mais quatro oitavos.



h) Quatro terços mais dois terços.




Nome: _____ nº: _____ T. _____ Data: _____

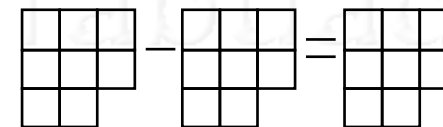
6.3.4b Adição e Subtração de Partes do Todo

1. Pinte as frações abaixo conforme o comando e calcule:

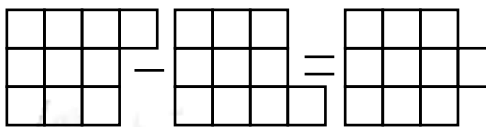
a) Dois quintos mais um quinto.



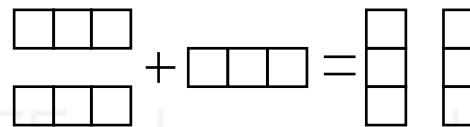
b) Seis oitavos menos dois oitavos.



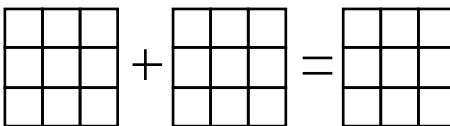
c) Nove décimos menos sete décimos.



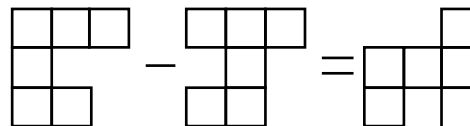
d) Quatro terços mais um terço.



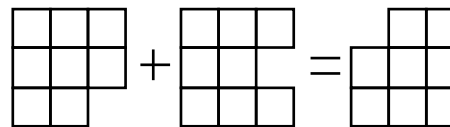
e) Cinco nonos mais quatro nonos.



f) Seis sextos menos cinco sextos.



e) Três oitavos mais quatro oitavos.



f) Quatro terços mais dois terços.

