
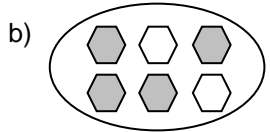
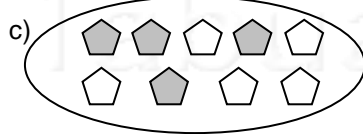
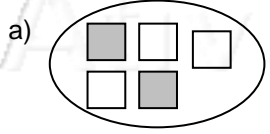



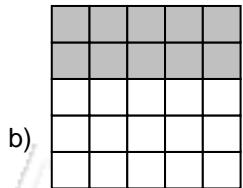
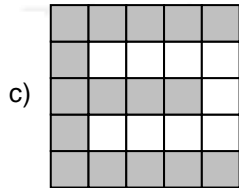
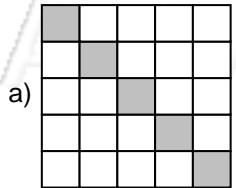
Nome: _____ nº: _____ T. _____ Data: _____

6.3.2a Partes do todo

1. Escreva a fração correspondente à parte colorida e a parte sem cor:



2. Escreva a fração correspondente à parte colorida e simplifique-a:



3. Escreva a fração correspondente à parte colorida e simplifique-a:

