
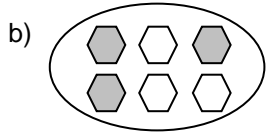
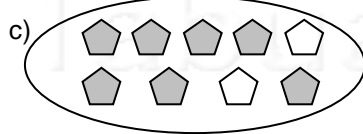
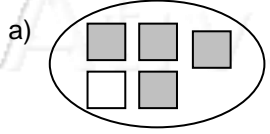



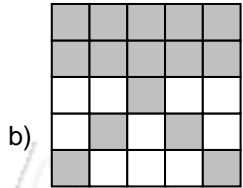


Nome: \_\_\_\_\_ nº: \_\_\_\_\_ T. \_\_\_\_\_ Data: \_\_\_\_\_

6.3.2b Partes do todo

1. Escreva a fração correspondente à parte colorida e a parte sem cor:



2. Escreva a fração correspondente à parte colorida e simplifique-a:



3. Escreva a fração correspondente à parte colorida e simplifique-a:

