

Nome: _____ nº: _____ T. _____ Data: _____

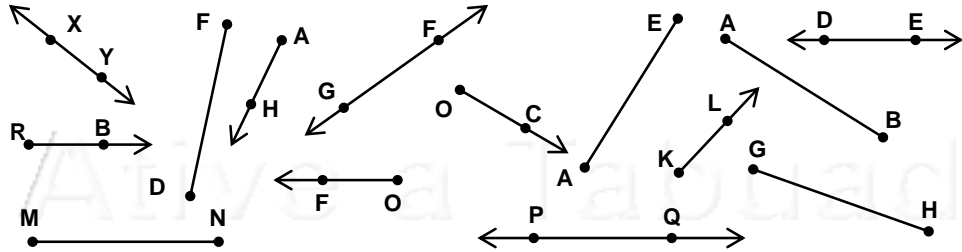
6.7.4a Classificação e Nomeação de Retas

1. Qual a quantidade de:

a) Retas	
b) Semi-retas	
c) Segmentos	

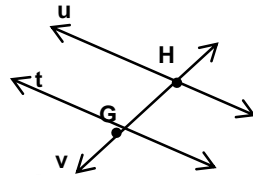
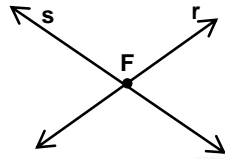
2. Escreva os nomes das:

a) Retas	
b) Semi-retas	
c) Segmentos	

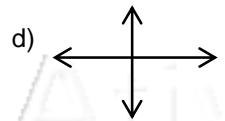
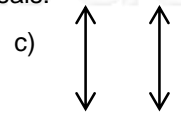
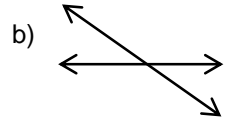
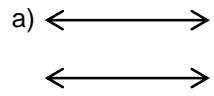


3. Dê a intersecção dos pontos nas retas abaixo:

- a) $r \cap s =$ _____
- b) $t \cap u =$ _____
- c) $t \cap v =$ _____
- d) $u \cap v =$ _____



4. Classifique em Paralelas, Concorrentes ou Transversais:



Nome: _____ nº: _____ T. _____ Data: _____

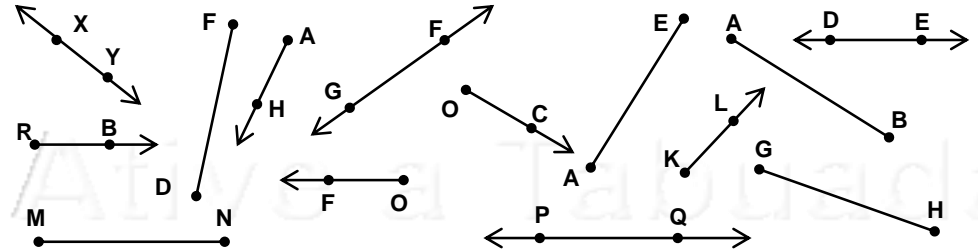
6.7.4a Classificação e Nomeação de Retas

1. Qual a quantidade de:

a) Retas	
b) Semi-retas	
c) Segmentos	

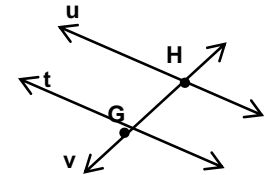
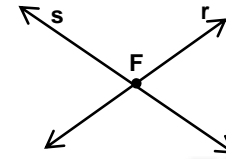
2. Escreva os nomes das:

a) Retas	
b) Semi-retas	
c) Segmentos	



3. Dê a intersecção dos pontos nas retas abaixo:

- a) $r \cap s =$ _____
- b) $t \cap u =$ _____
- c) $t \cap v =$ _____
- d) $u \cap v =$ _____



4. Classifique em Paralelas, Concorrentes ou Transversais:

