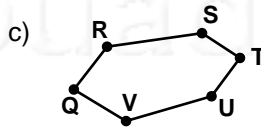
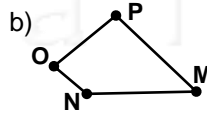
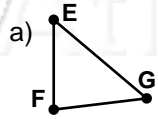
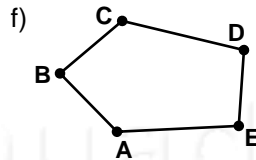
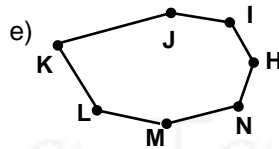
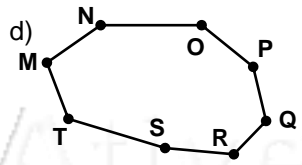


Nome: _____ nº: _____ T. _____ Data: _____

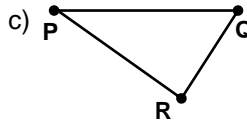
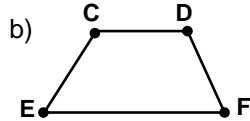
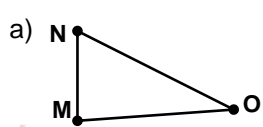
6.7.5a Nomeando Polígonos e Ângulos

1. Nomeie os polígonos pelo número de lados e a partir de seus vértices:



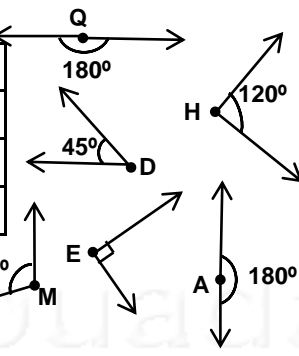


2. Nomeie os lados dos polígonos abaixo e seus ângulos (com uma letra):



3. Quantos e quais são os ângulos:

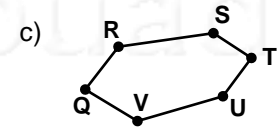
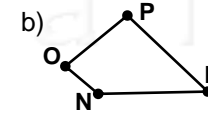
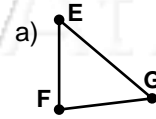
a) retos		
b) agudos		
c) obtusos		
d) rasos		

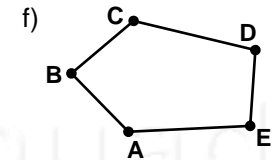
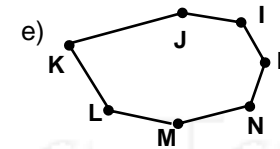
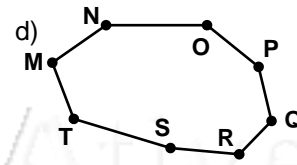


Nome: _____ nº: _____ T. _____ Data: _____

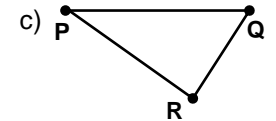
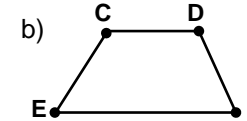
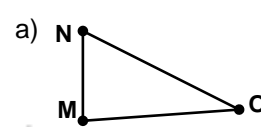
6.7.5a Nomeando Polígonos e Ângulos

1. Nomeie os polígonos pelo número de lados e a partir de seus vértices:





2. Nomeie os lados dos polígonos abaixo e seus ângulos (com uma letra):



3. Quantos e quais são os ângulos:

a) retos		
b) agudos		
c) obtusos		
d) rasos		

