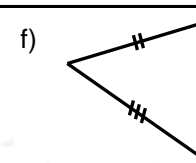
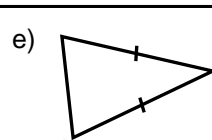
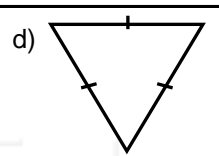
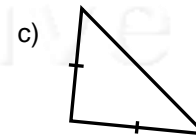
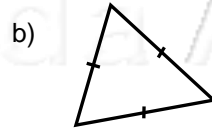
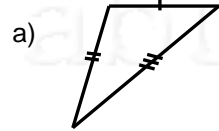


Nome: \_\_\_\_\_ nº: \_\_\_\_\_ T. \_\_\_\_\_ Data: \_\_\_\_\_

6.7.11b Testes e Classificação de Triângulos

1. Um ângulo de 90 graus é chamado de:  
a) Agudo                      b) Obtuso                      c) Noventa                      d) Reto
2. Triângulo que possui três ângulos agudos:  
a) Retângulo                      b) Obtusângulo                      c) Acutângulo                      d) Equilátero
3. Triângulo que possui três lados iguais:  
a) Isósceles                      b) Equilátero                      c) Acutângulo                      d) Escaleno
4. Triângulo que tem dois lados iguais:  
a) Isósceles                      b) Equilátero                      c) Escaleno                      d) Retângulo
5. Classifique os triângulos em Equilátero, Isósceles ou Escaleno:



6. Classifique os triângulos em Acutângulo, Obtusângulo ou Retângulo:

