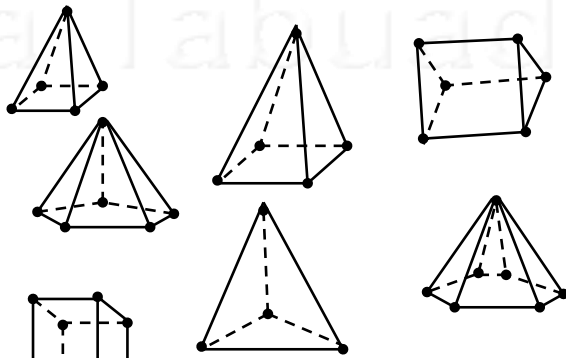


Nome: _____ nº: _____ T. _____ Data: _____

6.8.4b Classificação de Poliedros

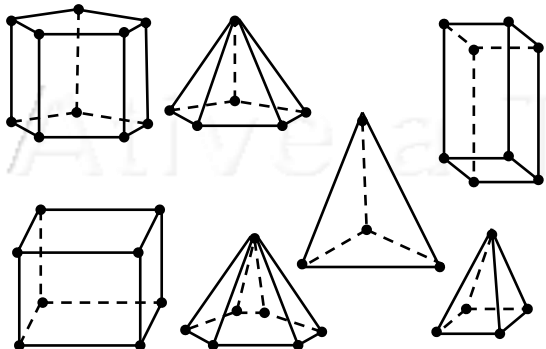
1. Qual a total de Pirâmides:

a) Todas	
b) Triangulares	
c) Quadrangulares	
d) Pentagonais	
e) Hexagonais	



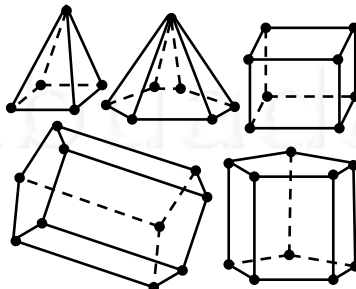
2. Qual a total de Prismas:

a) Todos	
b) Triangulares	
c) Cubos	
d) Paralelepípedos	
e) Pentagonais	



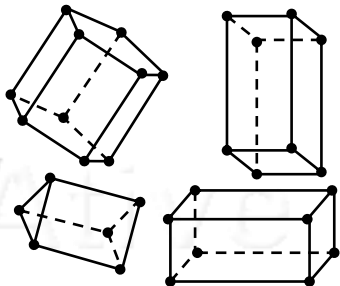
3. Complete a tabela para cada uma das Pirâmides:

	Vértices	Arestas	Faces
a) Triangular			
b) Quadrangular			
c) Pentagonal			
d) Hexagonal			



4. Complete a tabela para cada um dos

Prismas	Vértices	Arestas	Faces
a) Triangular			
b) Cubo			
c) Paralelepípedo			
d) Pentagonal			

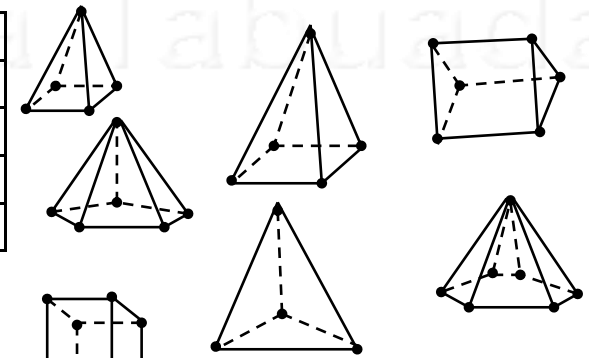


Nome: _____ nº: _____ T. _____ Data: _____

6.8.4b Classificação de Poliedros

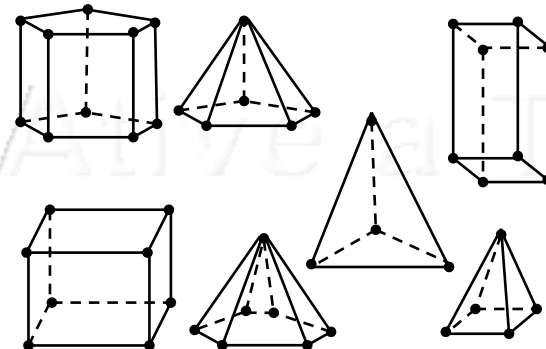
1. Qual a total de Pirâmides:

a) Todas	
b) Triangulares	
c) Quadrangulares	
d) Pentagonais	
e) Hexagonais	



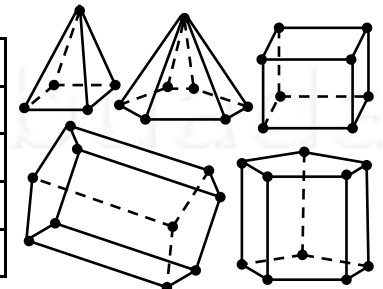
2. Qual a total de Prismas:

a) Todos	
b) Triangulares	
c) Cubos	
d) Paralelepípedos	
e) Pentagonais	



3. Complete a tabela para cada uma das Pirâmides:

	Vértices	Arestas	Faces
a) Triangular			
b) Quadrangular			
c) Pentagonal			
d) Hexagonal			



4. Complete a tabela para cada um dos

Prismas	Vértices	Arestas	Faces
a) Triangular			
b) Cubo			
c) Paralelepípedo			
d) Pentagonal			

