

Nome: _____ nº: _____ T. _____ Data: _____

7.1.23a Comparação de Inteiros

1. Efetue os cálculos e complete com os símbolos de >, < ou =.

a) $-11 + (+1)$ ___ $-3 + (-6)$ e) $-31 + 40$ ___ $+36 - 38$ i) $-(54) + (2)$ ___ $-40 - 24$

b) $-17 - (+12)$ ___ $-37 - (-8)$ f) $-28 - 21$ ___ $-78 + 46$ j) $17 - 13$ ___ $-3 \times (-5)$

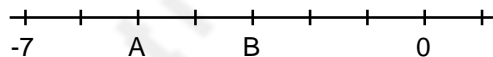
c) $-9 \times (+5)$ ___ $+9 \times (-6)$ g) $-40 \times (+5)$ ___ $27 \times (-3)$ k) $-24 : (-4)$ ___ $12 : 2$

d) $+224 : (-4)$ ___ $84 : (6)$ h) $316 : 4$ ___ $-158 : (-2)$ l) -7×5 ___ $74 : (-2)$

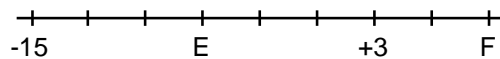
2. Coloque a tabela abaixo em

ordem:	Crescente
-63	
35	
52	
-409	
-571	
762	
-682	
-213	

4. Qual o valor de A e B?



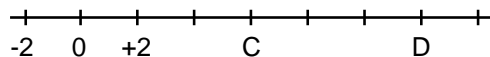
6. Qual o valor de E e F?



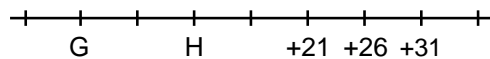
3. Coloque a tabela abaixo em

ordem:	Decrescente
258	
-252	
329	
-542	
245	
-123	
1245	
103	

5. Qual o valor de C e D?



7. Qual o valor de G e H?



Nome: _____ nº: _____ T. _____ Data: _____

7.1.23a Comparação de Inteiros

1. Efetue os cálculos e complete com os símbolos de >, < ou =.

a) $-11 + (+1)$ ___ $-3 + (-6)$ e) $-31 + 40$ ___ $+36 - 38$ i) $-(54) + (2)$ ___ $-40 - 24$

b) $-17 - (+12)$ ___ $-37 - (-8)$ f) $-28 - 21$ ___ $-78 + 46$ j) $17 - 13$ ___ $-3 \times (-5)$

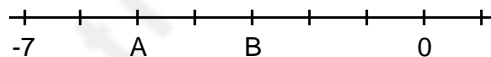
c) $-9 \times (+5)$ ___ $+9 \times (-6)$ g) $-40 \times (+5)$ ___ $27 \times (-3)$ k) $-24 : (-4)$ ___ $12 : 2$

d) $+224 : (-4)$ ___ $84 : (6)$ h) $316 : 4$ ___ $-158 : (-2)$ l) -7×5 ___ $74 : (-2)$

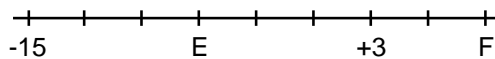
2. Coloque a tabela abaixo em

ordem:	Crescente
-63	
35	
52	
-409	
-571	
762	
-682	
-213	

4. Qual o valor de A e B?



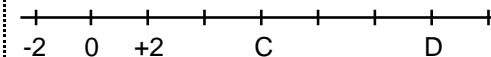
6. Qual o valor de E e F?



3. Coloque a tabela abaixo em

ordem:	Decrescente
258	
-252	
329	
-542	
245	
-123	
1245	
103	

5. Qual o valor de C e D?



7. Qual o valor de G e H?

