

Nome: _____ nº: _____ T. _____ Data: _____

7.1.23a Comparação de Inteiros

1. Efetue os cálculos e complete com os símbolos de $>$, $<$ ou $=$.

a) $-11 + (+1)$ ___ $-3 + (-6)$ e) $-31 + 40$ ___ $+36 - 38$ i) $-(54) + (2)$ ___ $-40 - 24$

b) $-17 - (+12)$ ___ $-37 - (-8)$ f) $-28 - 21$ ___ $-78 + 46$ j) $17 - 13$ ___ $-3 \times (-5)$

c) $-9 \times (+5)$ ___ $+9 \times (-6)$ g) $-40 \times (+5)$ ___ $27 \times (-3)$ k) $-24 : (-4)$ ___ $12 : 2$

d) $+224 : (-4)$ ___ $84 : (6)$ h) $316 : 4$ ___ $-158 : (-2)$ l) -7×5 ___ $74 : (-2)$

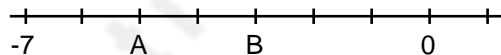
2. Coloque a tabela abaixo em

| ordem: | Crescente |
|--------|-----------|
| -63 | |
| 35 | |
| 52 | |
| -409 | |
| -571 | |
| 762 | |
| -682 | |
| -213 | |

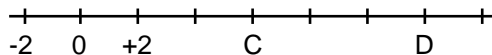
3. Coloque a tabela abaixo em

| ordem: | Decrescente |
|--------|-------------|
| 258 | |
| -252 | |
| 329 | |
| -542 | |
| 245 | |
| -123 | |
| 1245 | |
| 103 | |

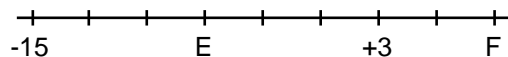
4. Qual o valor de A e B?



5. Qual o valor de C e D?



6. Qual o valor de E e F?



7. Qual o valor de G e H?

