

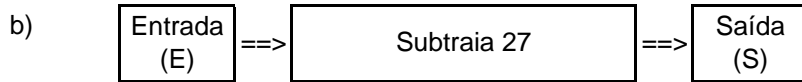
Nome: \_\_\_\_\_ nº: \_\_\_\_\_ T. \_\_\_\_\_ Data: \_\_\_\_\_

8.2.2a Máquinas de Calcular

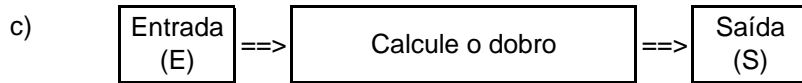
1. Observe as máquinas de calcular e complete as tabelas.



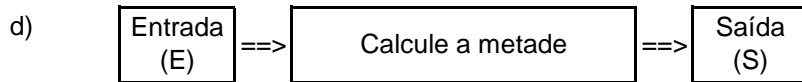
E	12	23	-5	+5	-4,2	4,25	3/2	n
S								



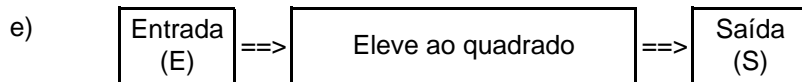
E	2	8	-3	0,15	-2	0	3/2	x
S								



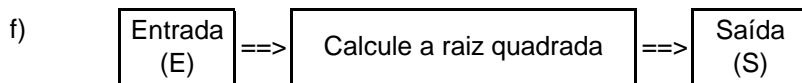
E	32	-18	+12	0,17	-2	0	2/3	y
S								



E	5,5	-0,22	8	-16,8	1	9	2/3	m
S								



E	2	0,8	-3	1,5	-1,6	-1	2/3	q
S								

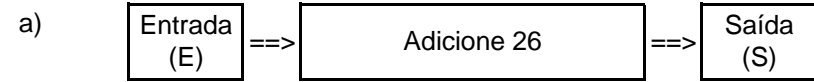


E	4	81	16	0,04	36	0	25/9	r
S								

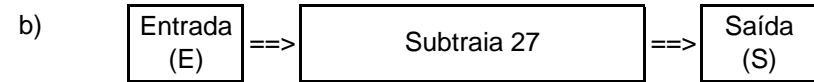
Nome: \_\_\_\_\_ nº: \_\_\_\_\_ T. \_\_\_\_\_ Data: \_\_\_\_\_

8.2.2a Máquinas de Calcular

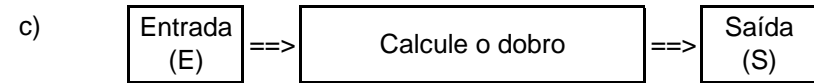
1. Observe as máquinas de calcular e complete as tabelas.



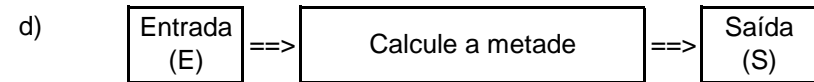
E	12	23	-5	+5	-4,2	4,25	3/2	n
S								



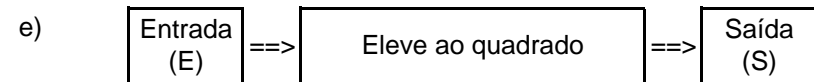
E	2	8	-3	0,15	-2	0	3/2	x
S								



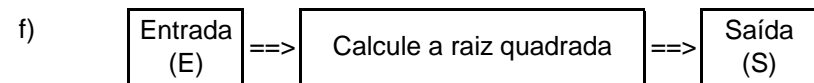
E	32	-18	+12	0,17	-2	0	2/3	y
S								



E	5,5	-0,22	8	-16,8	1	9	2/3	m
S								



E	2	0,8	-3	1,5	-1,6	-1	2/3	q
S								



E	4	81	16	0,04	36	0	25/9	r
S								