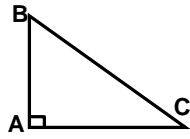


Nome: \_\_\_\_\_ nº: \_\_\_\_\_ T. \_\_\_\_\_ Data: \_\_\_\_\_

9.1.1a Seno, Cosseno e Tangente no Triângulo Retângulo

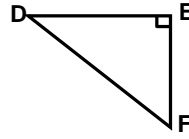
1. No triângulo abaixo o segmento da hipotenusa é:

- a) AB    c) AD  
b) AC    d) BC



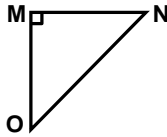
2. No triângulo abaixo o cateto oposto ao ângulo D é:

- a) ED    c) DF  
b) EF    d) FG



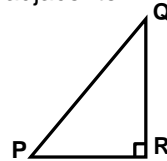
3. No triângulo MNO o ângulo reto está no vértice:

- a) M    c) O  
b) N    d) NO

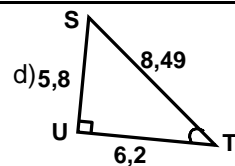
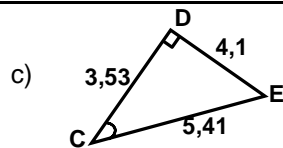
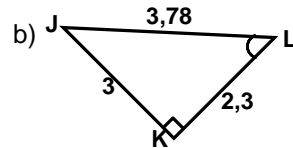
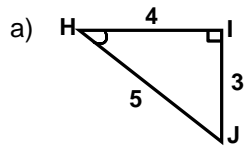


4. No  $\Delta PQR$  o cateto adjacente ao ângulo Q é:

- a) QP    c) PR  
b) QR    d) PS



5. Em cada triângulo calcule, com até três casas decimais, o valor do Seno, Cosseno e da Tangente:




---

---

---

---

---

---

---

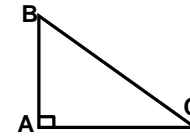
---

Nome: \_\_\_\_\_ nº: \_\_\_\_\_ T. \_\_\_\_\_ Data: \_\_\_\_\_

9.1.1a Seno, Cosseno e Tangente no Triângulo Retângulo

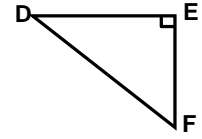
1. No triângulo abaixo o segmento da hipotenusa é:

- a) AB    c) AD  
b) AC    d) BC



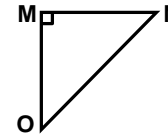
2. No triângulo abaixo o cateto oposto ao ângulo D é:

- a) ED    c) DF  
b) EF    d) FG



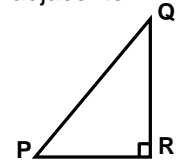
3. No triângulo MNO o ângulo reto está no vértice:

- a) M    c) O  
b) N    d) NO

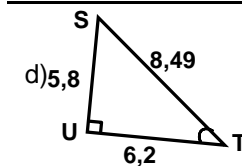
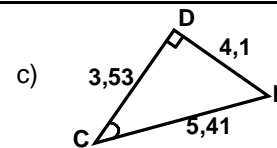
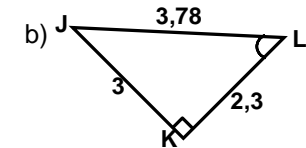
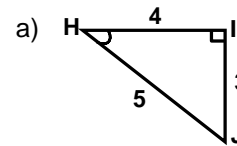


4. No  $\Delta PQR$  o cateto adjacente ao ângulo Q é:

- a) QP    c) PR  
b) QR    d) PS



5. Em cada triângulo calcule, com até três casas decimais, o valor do Seno, Cosseno e da Tangente:




---

---

---

---

---

---

---

---