

Nome: \_\_\_\_\_ nº: \_\_\_\_\_ T. \_\_\_\_\_ Data: \_\_\_\_\_

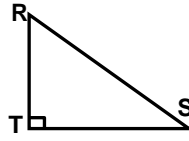
9.1.1b Seno, Cosseno e Tangente no Triângulo Retângulo

1. No triângulo abaixo o segmento

da hipotenusa é:

a)  $\overline{RT}$  c)  $\overline{TS}$

b)  $\overline{RS}$  d)  $\overline{TX}$

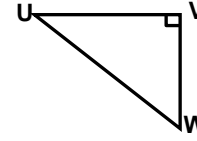


2. No triângulo abaixo o cateto oposto

ao ângulo W é:

a)  $\overline{UW}$  c)  $\overline{UV}$

b)  $\overline{VW}$  d)  $\overline{UM}$

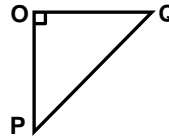


3. No triângulo OPQ o ângulo reto

está no vértice:

a) O c) Q

b) P d)  $\overline{OP}$

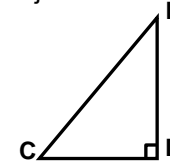


4. No  $\triangle CDE$  o cateto adjacente

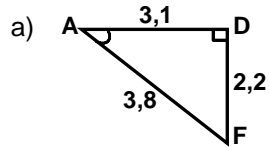
ao ângulo E é:

a)  $\overline{CD}$  c)  $\overline{EC}$

b)  $\overline{CA}$  d)  $\overline{ED}$



5. Em cada triângulo calcule, com até três casas decimais, o valor do Seno, Cosseno e da Tangente:

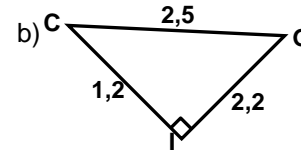



---

---

---

---

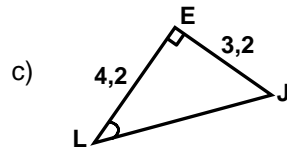



---

---

---

---

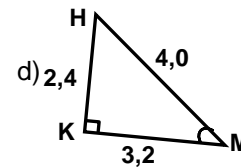



---

---

---

---




---

---

---

---