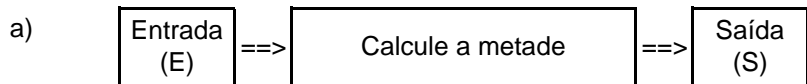


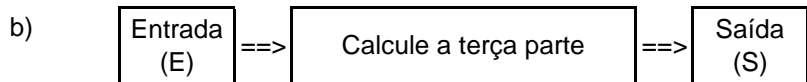
Nome: _____ nº: _____ T. _____ Data: _____

g8.11a Divisão Exata

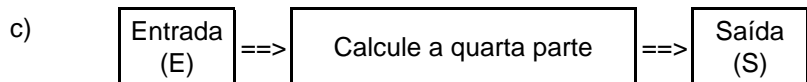
1. Observe as máquinas de calcular e complete as tabelas.



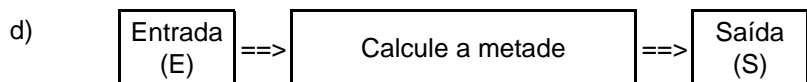
E	34	76	50	92	56	0	18	36
S								



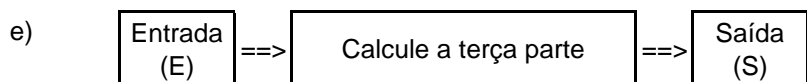
E	72	54	45	87	21	18	0	42
S								



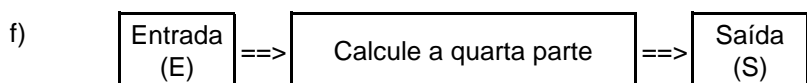
E	104	240	108	72	96	76	132	0
S								



E	332	574	966	836	778	972	554	750
S								



E	444	522	705	813	975	717	111	222
S								

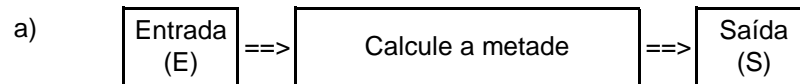


E	228	904	368	312	272	392	928	300
S								

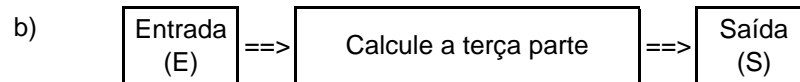
Nome: _____ nº: _____ T. _____ Data: _____

g8.11a Divisão Exata

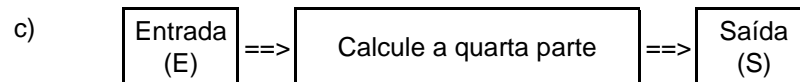
1. Observe as máquinas de calcular e complete as tabelas.



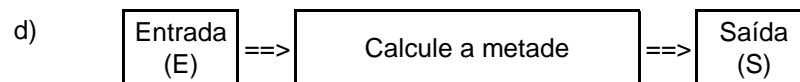
E	34	76	50	92	56	0	18	36
S								



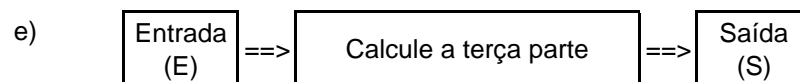
E	72	54	45	87	21	18	0	42
S								



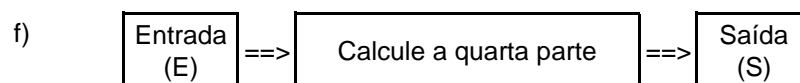
E	104	240	108	72	96	76	132	0
S								



E	332	574	966	836	778	972	554	750
S								



E	444	522	705	813	975	717	111	222
S								



E	228	904	368	312	272	392	928	300
S								