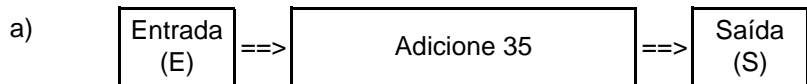



Nome: _____ nº: _____ T. _____ Data: _____

g8.4b Adição - Vai um


1. Observe as máquinas de calcular e complete as tabelas.



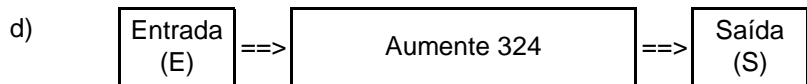
E	78	58	87	96	77	186	268	309
S								



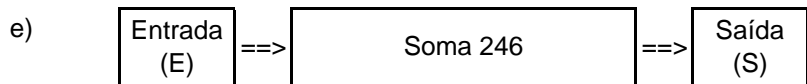
E	55	73	87	258	355	525	162	239
S								



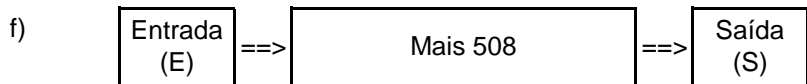
E	77	88	95	87	597	0	316	466
S								



E	78	85	76	67	89	185	389	499
S								



E	97	53	54	168	596	689	464	246
S								

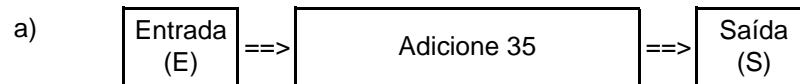


E	85	92	193	412	296	394	0	408
S								

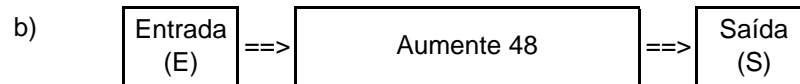
Nome: _____ nº: _____ T. _____ Data: _____

g8.4b Adição - Vai um


1. Observe as máquinas de calcular e complete as tabelas.



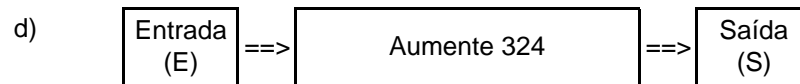
E	78	58	87	96	77	186	268	309
S								



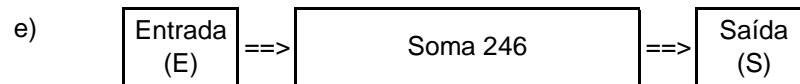
E	55	73	87	258	355	525	162	239
S								



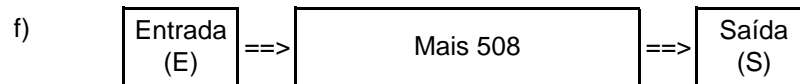
E	77	88	95	87	597	0	316	466
S								



E	78	85	76	67	89	185	389	499
S								



E	97	53	54	168	596	689	464	246
S								



E	85	92	193	412	296	394	0	408
S								