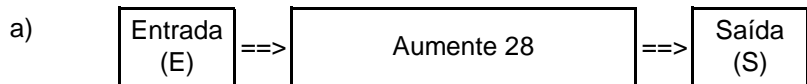


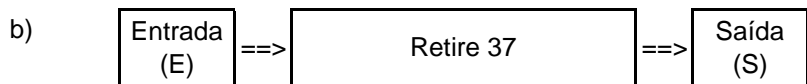
Nome: _____ nº: _____ T. _____ Data: _____

g8.6b Adição e Subtração - Com vai um e pede emprestado

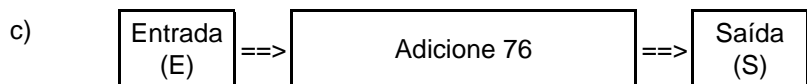
1. Observe as máquinas de calcular e complete as tabelas.



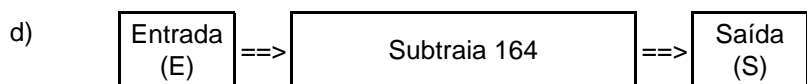
E	75	83	82	93	97	94	79	176
S								



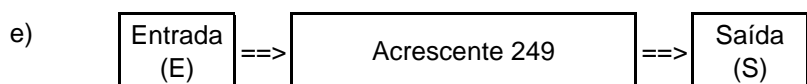
E	100	203	126	324	230	213	501	225
S								



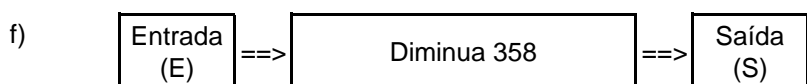
E	39	95	74	88	35	44	148	628
S								



E	231	311	500	412	610	243	665	450
S								



E	85	71	173	289	355	486	571	692
S								

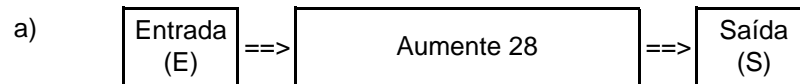


E	445	515	600	723	831	906	832	427
S								

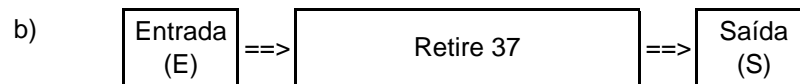
Nome: _____ nº: _____ T. _____ Data: _____

g8.6b Adição e Subtração - Com vai um e pede emprestado

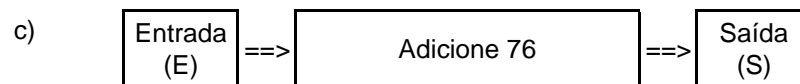
1. Observe as máquinas de calcular e complete as tabelas.



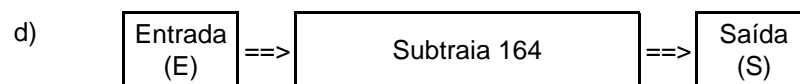
E	75	83	82	93	97	94	79	176
S								




E	100	203	126	324	230	213	501	225
S								



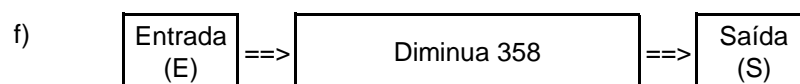
E	39	95	74	88	35	44	148	628
S								



E	231	311	500	412	610	243	665	450
S								



E	85	71	173	289	355	486	571	692
S								



E	445	515	600	723	831	906	832	427
S								