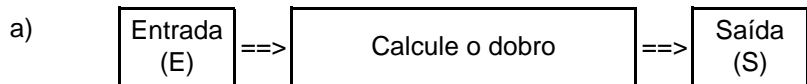


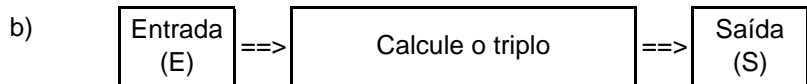
Nome: \_\_\_\_\_ nº: \_\_\_\_\_ T. \_\_\_\_\_ Data: \_\_\_\_\_

g8.8a Multiplicação

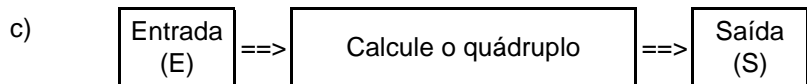
1. Observe as máquinas de calcular e complete as tabelas.



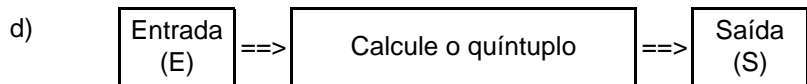
E	66	89	75	97	68	87	96	55
S								



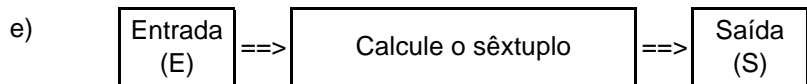
E	151	200	340	441	624	510	622	72
S								



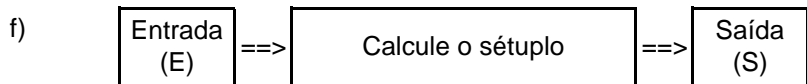
E	45	54	66	58	97	174	289	358
S								



E	310	431	352	450	322	429	602	300
S								



E	398	485	387	192	393	189	284	477
S								

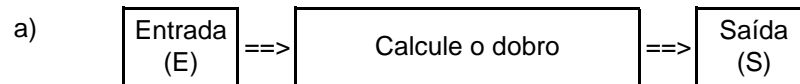


E	462	506	660	831	966	477	661	555
S								

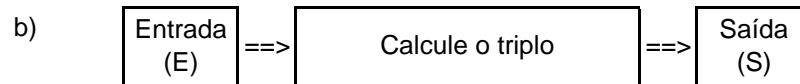
Nome: \_\_\_\_\_ nº: \_\_\_\_\_ T. \_\_\_\_\_ Data: \_\_\_\_\_

g8.8a Multiplicação

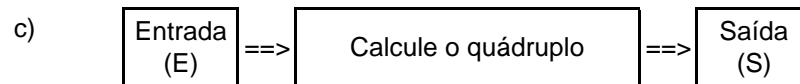
1. Observe as máquinas de calcular e complete as tabelas.



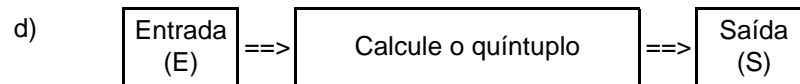
E	66	89	75	97	68	87	96	55
S								



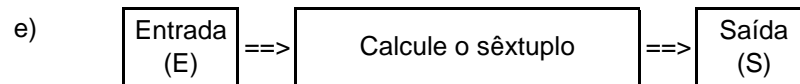
E	151	200	340	441	624	510	622	72
S								



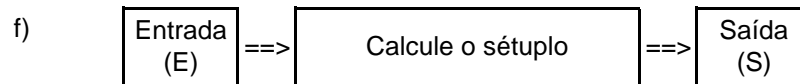
E	45	54	66	58	97	174	289	358
S								



E	310	431	352	450	322	429	602	300
S								



E	398	485	387	192	393	189	284	477
S								



E	462	506	660	831	966	477	661	555
S								