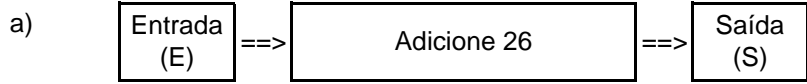


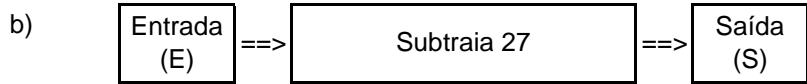
Nome: _____ nº: _____ T. _____ Data: _____

g8.9b Adição, Subtração e Multiplicação

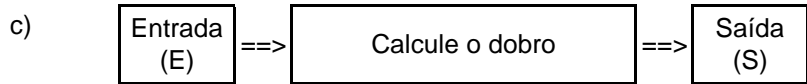
1. Observe as máquinas de calcular e complete as tabelas.



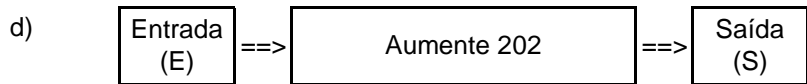
E	12	23	44	56	83	119	245	390
S								



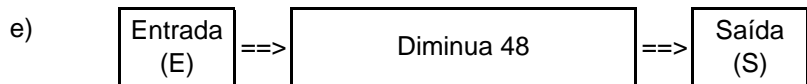
E	58	93	105	204	301	246	128	87
S								



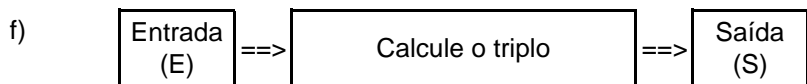
E	32	18	12	102	347	0	205	145
S								



E	12	23	44	56	83	119	245	390
S								



E	59	94	103	107	306	467	470	76
S								



E	56	25	102	312	85	203	0	134
S								

Nome: _____ nº: _____ T. _____ Data: _____

g8.9b Adição, Subtração e Multiplicação

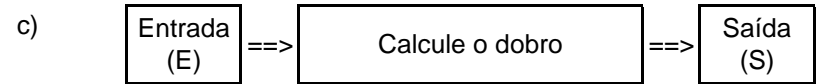
1. Observe as máquinas de calcular e complete as tabelas.



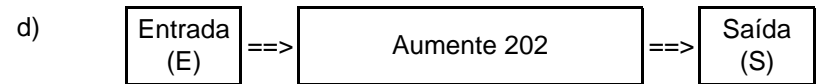
E	12	23	44	56	83	119	245	390
S								



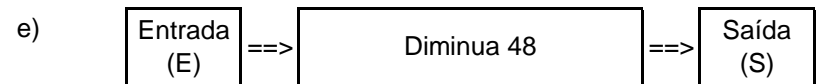
E	58	93	105	204	301	246	128	87
S								



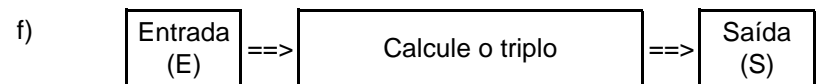
E	32	18	12	102	347	0	205	145
S								



E	12	23	44	56	83	119	245	390
S								



E	59	94	103	107	306	467	470	76
S								



E	56	25	102	312	85	203	0	134
S								