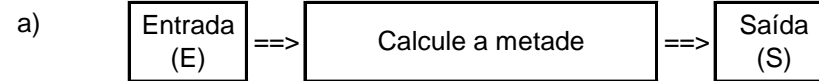


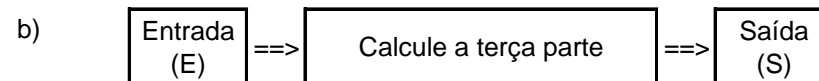
Nome: _____ nº: _____ T. _____ Data: _____

g8.10a Divisão Simples

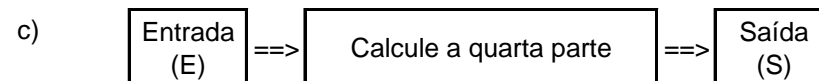
1. Observe as máquinas de calcular e complete as tabelas.



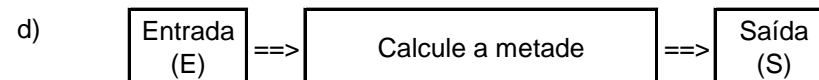
| | | | | | | | | |
|---|----|----|----|----|----|----|---|----|
| E | 24 | 84 | 60 | 82 | 46 | 28 | 0 | 88 |
| S | | | | | | | | |



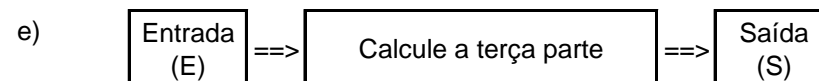
| | | | | | | | | |
|---|----|----|----|----|----|---|----|----|
| E | 60 | 93 | 36 | 96 | 30 | 0 | 90 | 69 |
| S | | | | | | | | |



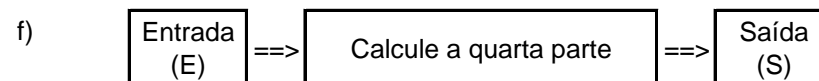
| | | | | | | | | |
|---|----|----|----|-----|---|-----|-----|-----|
| E | 44 | 84 | 48 | 404 | 0 | 804 | 480 | 848 |
| S | | | | | | | | |



| | | | | | | | | |
|---|-----|-----|-----|-----|-----|-----|-----|-----|
| E | 608 | 446 | 482 | 840 | 682 | 246 | 402 | 646 |
| S | | | | | | | | |



| | | | | | | | | |
|---|-----|-----|-----|-----|-----|-----|-----|-----|
| E | 333 | 693 | 906 | 930 | 696 | 900 | 609 | 963 |
| S | | | | | | | | |



| | | | | | | | | |
|---|-----|-----|-----|-----|-----|-----|-----|-----|
| E | 408 | 800 | 844 | 888 | 448 | 484 | 840 | 400 |
| S | | | | | | | | |