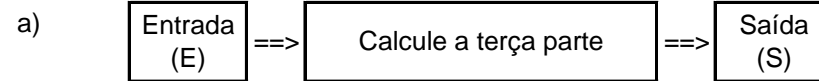


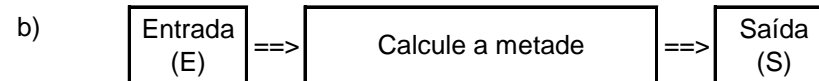
Nome: _____ nº: _____ T. _____ Data: _____

g8.10b Divisão Simples

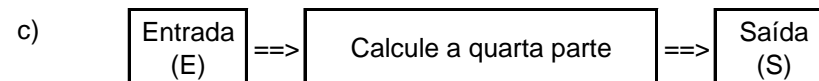
1. Observe as máquinas de calcular e complete as tabelas.



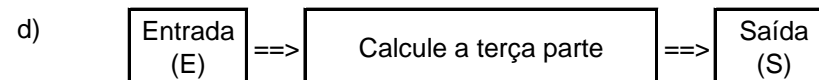
E	96	0	66	36	90	63	30	99
S								



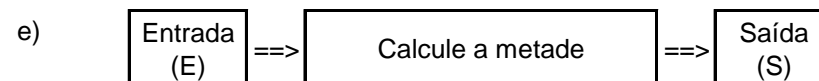
E	12	20	86	68	0	48	26	60
S								



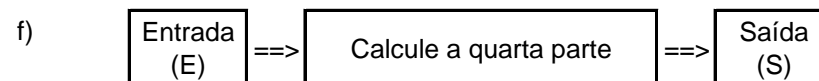
E	48	888	404	800	40	0	840	408
S								



E	369	693	300	0	609	930	669	303
S								



E	220	804	682	464	624	868	246	248
S								



E	56	25	102	312	85	203	0	134
S								