



Nome: _____ nº: _____ T. _____ Data: _____

g8.4a Adição - Vai um


1. Observe as máquinas de calcular e complete as tabelas.



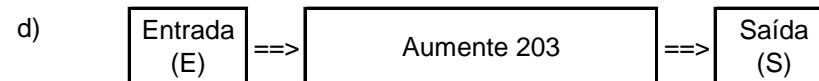
E	77	48	99	66	89	237	149	788
S								




E	87	28	96	57	65	76	87	326
S								



E	49	85	75	96	458	88	399	667
S								



E	796	297	398	496	321	807	238	477
S								



E	498	699	393	495	596	394	499	285
S								



E	38	66	78	84	479	946	678	464
S								