

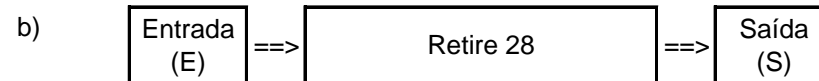
Nome: _____ nº: _____ T. _____ Data: _____

g8.5a Subtração - Pede emprestado

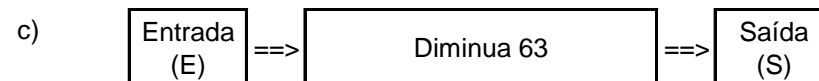
1. Observe as máquinas de calcular e complete as tabelas.



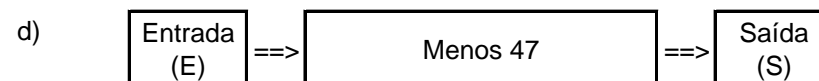
E	151	210	91	160	100	201	521	440
S								



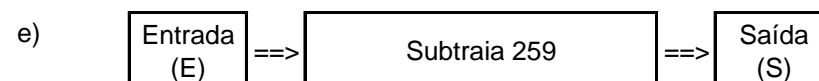
E	517	611	316	103	504	206	327	107
S								



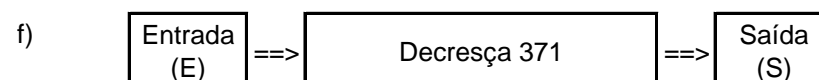
E	350	632	201	302	400	201	612	552
S								



E	116	201	60	126	304	215	116	325
S								



E	1202	347	538	606	335	728	314	543
S								



E	970	530	770	430	380	800	560	610
S								